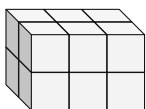


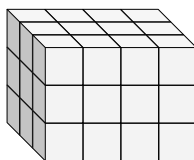


Find the length, width and height of the rectangular prism. Then find the volume.

Ex)



1)



Answers

Ex. 2 3 2 12

1. _____

2. _____

3. _____

4. _____

5. _____

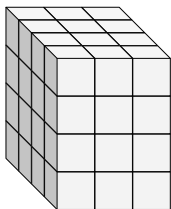
6. _____

7. _____

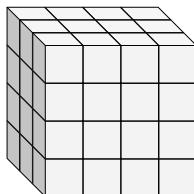
8. _____

9. _____

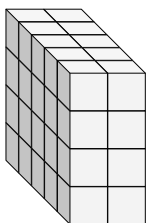
2)



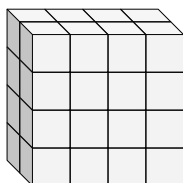
3)



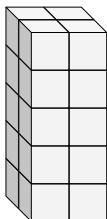
4)



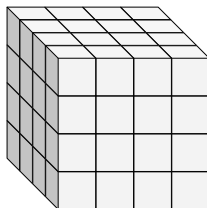
5)



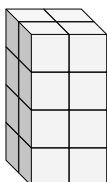
6)



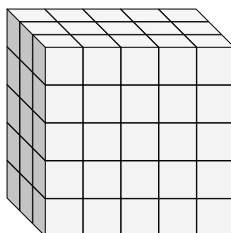
7)



8)



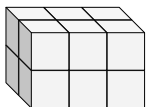
9)



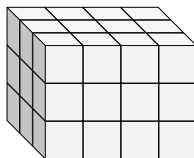


Find the length, width and height of the rectangular prism. Then find the volume.

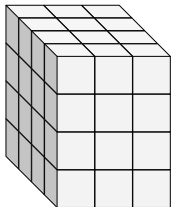
Ex)



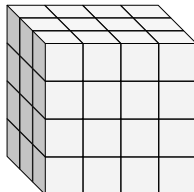
1)



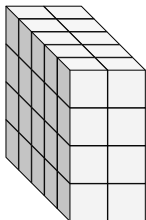
2)



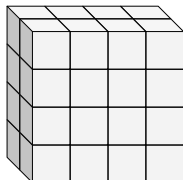
3)



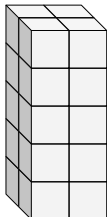
4)



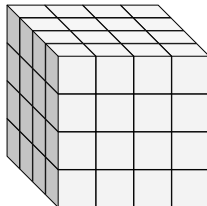
5)



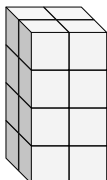
6)



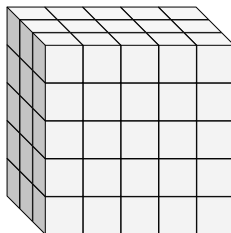
7)



8)



9)



Answers

Ex. 2 3 2 12

1. 3 4 3 36

2. 4 3 4 48

3. 3 4 4 48

4. 5 2 4 40

5. 2 4 4 32

6. 2 2 5 20

7. 4 4 4 64

8. 2 2 4 16

9. 3 5 5 75